





Nombre: _____





VAMOS A CONTAR

Cuenta y marca con una x la respuesta correcta.

¿Dónde hay menos manzanas?





¿Dónde hay más estrellas?





 <input type="radio"/>	 <input type="radio"/>
 <input checked="" type="radio"/>	 <input type="radio"/>

 <input type="radio"/>	 <input type="radio"/>
 <input type="radio"/>	 <input type="radio"/>

¿Dónde hay más flores?

¿Dónde hay menos naranjas?

 <input type="radio"/>	 <input type="radio"/>
 <input type="radio"/>	 <input type="radio"/>

 <input type="radio"/>	 <input type="radio"/>
 <input type="radio"/>	 <input type="radio"/>





Nombre: _____





VAMOS A CONTAR

Cuenta y marca con una x la respuesta correcta.

¿Dónde hay menos cupcakes?

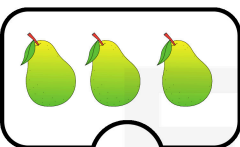
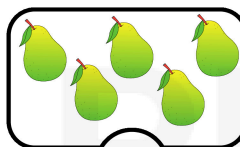


¿Dónde hay más fresas?





 <input type="radio"/>	 <input type="radio"/>
 <input type="radio"/>	 <input type="radio"/>

 <input type="radio"/>	 <input type="radio"/>
 <input type="radio"/>	 <input type="radio"/>

¿Dónde hay más peras?

¿Dónde hay menos helados?

 <input type="radio"/>	 <input type="radio"/>
 <input type="radio"/>	 <input type="radio"/>





 <input type="radio"/>	 <input type="radio"/>
 <input type="radio"/>	 <input type="radio"/>

Nombre: _____





VAMOS A CONTAR

Cuenta y marca con una x la respuesta correcta.

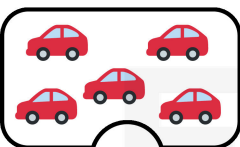
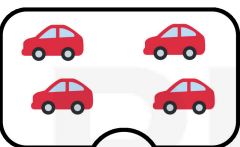

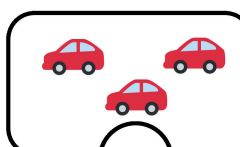
¿Dónde hay menos duraznos?

 <input type="radio"/>	 <input type="radio"/>
 <input type="radio"/>	 <input type="radio"/>

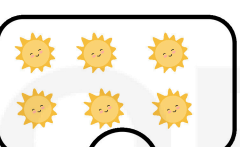



¿Dónde hay más gotas?

 <input type="radio"/>	 <input type="radio"/>
 <input type="radio"/>	 <input type="radio"/>

¿Dónde hay más autos?

 <input type="radio"/>	 <input type="radio"/>
 <input type="radio"/>	 <input type="radio"/>

¿Dónde hay menos soles?

 <input type="radio"/>	 <input type="radio"/>
 <input type="radio"/>	 <input type="radio"/>





Nombre: _____







VAMOS A CONTAR

Cuenta y marca con una x la respuesta correcta.





¿Dónde hay menos muslos?

 <input type="radio"/>	 <input type="radio"/>
 <input type="radio"/>	 <input type="radio"/>





¿Dónde hay mas arcoíris?

 <input type="radio"/>	 <input type="radio"/>
 <input type="radio"/>	 <input type="radio"/>

¿Dónde hay mas quesos?

 <input type="radio"/>	 <input type="radio"/>
 <input type="radio"/>	 <input type="radio"/>

¿Dónde hay menos huevos?

 <input type="radio"/>	 <input type="radio"/>
 <input type="radio"/>	 <input type="radio"/>




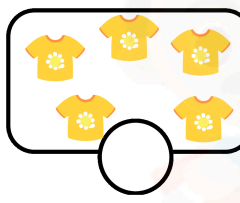
Nombre: _____







VAMOS A CONTAR

Cuenta y marca con una x la respuesta correcta.


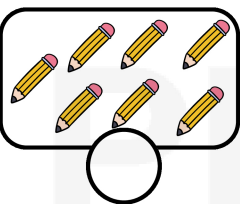


¿Dónde hay menos blusas?

 <input type="radio"/>	 <input type="radio"/>
 <input type="radio"/>	 <input type="radio"/>

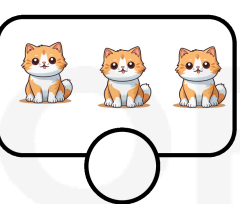
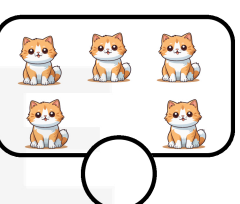
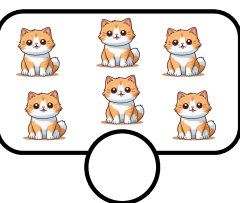
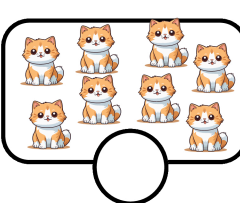
¿Dónde hay más arcoíris?

 <input type="radio"/>	 <input type="radio"/>
 <input type="radio"/>	 <input type="radio"/>

¿Dónde hay más lapices?

 <input type="radio"/>	 <input type="radio"/>
 <input type="radio"/>	 <input type="radio"/>

¿Dónde hay menos gatos?

 <input type="radio"/>	 <input type="radio"/>
 <input type="radio"/>	 <input type="radio"/>